

Homework Week 5: Oct. 2th – 6th

(Story- Animals Building Homes)

Name: _____ # _____

Assignments	Parent Initials
Monday: *Spelling Activity: Sitton Task 5 *Math: Home Link 2-8 (p. 29) *Read 20 minutes/Reading Log (Reading Log is attached at the end of the homework packet)	X _____
Tuesday: *Spelling: Select one activity from "Spelling Tic Tac Toe" *Math: Home Link 2-9 (p. 31) *Read 20 minutes/Reading Log	X _____
Wednesday: *Phonics Worksheets: "Animals Building Homes" p. 28-29 *Math: Home Link 2-10 (p.33-34) *Read 20 minutes/Reading Log	X _____
Thursday: *Language Arts: Find the Verbs *Math: Mixed Review Worksheet *Read 20 minutes/Reading Log	X _____
Friday: *Homework due today in Thursday Folder. *Reading Log due today (Sign and total the minutes) *Spelling and Math Facts Test today! *Challenge: October Calendar Activities (Optional)	
Reminders: *Oct 13- Mystery Book Report Due *Oct 20- Picture Make-up *Oct 23- Red Ribbon Week *Oct 27- Collaboration Day (Dismissal @11:35am) *Oct 30- Book Fair *Oct 31- Farmer's Breakfast	

Spelling List

(Story-Animals Building Homes)

- | | | |
|----------|-----------|------------|
| 1. next | 7. hunt | Challenge: |
| 2. end | 8. stand | *young |
| 3. camp | 9. long | *friend |
| 4. sank | 10. stamp | |
| 5. sing | 11. pond | |
| 6. drink | 12. bring | |

Sitton Spelling (Unit 5)

1. some
2. so
3. these
4. would
5. other

Vocabulary

- | | |
|-------------|------------|
| 1. shaped | 5. deepest |
| 2. branches | 6. break |
| 3. pond | 7. hang |
| 4. beaks | 8. winding |



Dear Parents,


During spelling instruction, your child has been discovering silent letters in words. You cannot hear these letters when the word is said. Silent letters can make spelling very difficult. Yet, you and your child can have fun with these tricky words with silent letters as you complete this crossword game.

First, discuss the directions with your child. Then guide your child through the activity, letting your child do as much as possible without your help. Next, check the answers together.

After the game, ask your child to write each of the words in the puzzle on a sheet of paper. Discuss the silent letters in each of the words. Then be on the lookout with your child for more words with silent letters.

Use the words to solve the crossword game.

- have
- likes
- one
- some
- there
- were
- would
- toe



P.S. Could you make a crossword game for your child to do? You might try a game using words that have something in common, such as words that begin with *b*, or contain *th*.

Every child a speller!

Spelling Homework Tic Tac Toe

<p>Write each word 3 times each in your best handwriting!</p>	<p>Rainbow Spelling – Write words using 3 colors.</p>	<p>Write words on 2 index cards and play memory!</p>
<p>Play a game on spellingcity.com Print your certificate!</p>	<p>Write each word in a sentence</p>	<p>Write words with vowels red and consonants blue.</p>
<p>Cut out letters from a magazine to make spelling words.</p>	<p>Write your words in ABC order</p>	<p>Type words on a computer and print it out.</p>

Phonics

Answer Numbers 1 through 10. Choose the best answer for each question.

- 1 Which word BEST completes the sentence below?

After I exercise, I have a tall _____ of water.

- (A) drift
- (B) drink
- (C) thank

- 2 Which word BEST completes the sentence below?

Lori will _____ three weeks at her aunt's house.

- (F) spend
- (G) spring
- (H) went

- 3 Which word BEST completes the sentence below?

If we miss this bus, we can catch the _____ one.

- (A) long
- (B) next
- (C) trunk

- 4 Which word BEST completes the sentence below?

Alex will _____ popcorn to the holiday party.

- (F) bank
- (G) bring
- (H) left

- 5 Which word BEST completes the sentence below?

After finding a good place to _____, the men set up their tents.

- (A) camp
- (B) cent
- (C) sing

- 6 Which word BEST completes the sentence below?

Please _____ your name neatly at the top of the paper.

- (F) find
- (G) pink
- (H) print

- 7 Which word BEST completes the sentence below?

Elena will use her money to buy a small _____ for her dad.

- (A) gift
- (B) send
- (C) song

- 8 Which word BEST completes the sentence below?

Petra's bean _____ grew six inches during the night.

- (F) jump
- (G) plant
- (H) point

- 9 Which word BEST completes the sentence below?

Sheila saw three fat fish swimming in the _____.

- (A) pant
- (B) pond
- (C) string

- 10 Which word BEST completes the sentence below?

The students _____ their coats on hooks by the classroom door.

- (F) drank
- (G) hand
- (H) hung



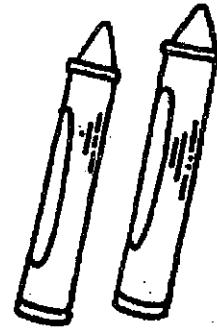
Name _____ Action verbs _____

Find the Verbs

A **verb** is an action word that tells what people or things do.
Go, eat, play, and swim are verbs.

Read each word in the spaces below.

If it is a verb, color it yellow. If it is not a verb, color it blue.



purple pencil
walk book talks
write two run cut the
you tree spin move jump bird
I work old
green sleep read make a
she him

Try This! Write five verbs that tell what you do at school.

1. Write the number:

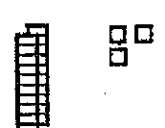
- a. after 42 _____ 79 _____ 357 _____ 619 _____
- b. before _____ 56 _____ 98 _____ 872 _____ 523
- c. between 64 _____ 66 428 _____ 430

2. Write the missing numbers. Count by:

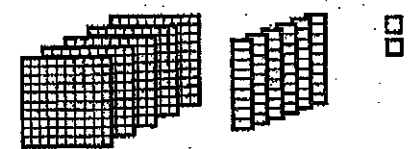
- a. 10's 40 50 _____ _____ 280 290 _____ _____
- b. 5's 35 40 _____ _____ 655 660 _____ _____
- c. 2's 22 24 _____ _____ 730 732 _____ _____

3. Write how many.

a.



_____ tens _____ ones



_____ hundreds _____ tens _____ ones

b.

tens	ones
8	6

tens	ones
5	0

tens	ones
1	9

h	t	o
3	9	8

h	t	o
7	1	4

4. Circle the numbers that have:

- 5 ones 65 52 85 28 7 hundreds
- 3 tens 37 13 39 63 674 782 527 794


5. Put > or < in the ○.


- 97 ○ 82 48 ○ 50 684 ○ 463 890 ○ 809

Weekly Reading Record

Name: _____

Date Due: _____

<p>Title of Book _____</p> <p>Date: _____</p> <p>Minutes _____</p>	<p>A noun is a person, place, or thing. Write 3 nouns from today's reading.</p> <p>1. _____</p> <p>2. _____</p> <p>3. _____</p>
<p>Title of Book _____</p> <p>Date: _____</p> <p>Minutes _____</p>	<p>Sequencing is the order of which events occur. Write down three events in the order they happened in the story.</p> <p>First, _____</p> <p>Next, _____</p> <p>Last, _____</p>
<p>Title of Book _____</p> <p>Date: _____</p> <p>Minutes _____</p>	<p>Compare how you and a character from today's reading are alike.</p> <p>I am similar to _____ because we both _____</p> <p>_____</p>
<p>Title of Book _____</p> <p>Date: _____</p> <p>Minutes _____</p>	<p>Good readers ask questions. Write 3 questions you had before, during, or after today's reading.</p> <p>1. _____</p> <p>2. _____</p> <p>3. _____</p>
<p>Title of Book _____</p> <p>Date: _____</p> <p>Minutes _____</p>	<p>Color the stars according to the rating you give today's reading. (3 awesome - 2 ok - 1 not so good. Write a sentence explaining why you rated the book how you did.</p> <p> _____</p>
<p>Total Minutes: _____</p>	<p>Parent's Signature _____</p>



Monday	Tuesday	Wednesday	Thursday	Friday
<p>This is Fire Prevention week. With your family create an evacuation plan for your home.</p> <p>Read a book. Write about how the setting helps you create a picture in your mind.</p> <p>Create your own place value riddles. Have a parent or older sibling try to solve them.</p> <p>Solve. $5 + 8 = \underline{\quad} + 4$ Explain how you solved the problem.</p>	<p>Read a book and write why you think the author wrote it. (persuade, inform, entertain, explain)</p> <p>Research how one item you use everyday is made. What are the steps?</p> <p>The main character usually faces a challenge. What is one challenge you have faced?</p> <p>Write the number 673 in expanded notation, label the place value of each digit.</p> <p>I bought a candy bar for 72 cents. I gave the cashier \$1.00. What coins could I get back?</p>	<p>Josie sees 8 pumpkins, Enzo sees twice as many. How many pumpkins do they see in all?</p> <p>Explain place value to an adult.</p> <p>Write a paragraph to explain the life cycle of a pumpkin.</p> <p>Compare two characters in a story. Write about how they are alike and different.</p> <p>Characters in a story sometimes change. Write about a character that changed and why.</p>	<p>Add the windows and doors in your home, then subtract the number of TVs and computers.</p> <p>89 kids are going on a field trip. Each bus can hold 25 kids. How many busses are needed?</p> <p>A number has 3 ones, 5 hundreds, and 0 tens. What number is it?</p> <p>In math, a student wrote $8+9 = 6+11$. Is this correct? Explain your reasoning.</p> <p>If you could trade places with anyone for a day, who would it be and why?</p>	<p>Write a poem about Fall.</p> <p>Fact families share the same three numbers. Write the 4 fact family equations for 7, 8, 15.</p> <p>Walk around your neighborhood collecting leaves. Compare an contrast two of them.</p> <p>Many stories teach a lesson. Write a story in which someone learns a valuable lesson.</p>